









Name _____

Date _____ # _____

3rd Grade Math Proficient Test 5 - <http://www.prepdog.org/3rd/3mp5.htm>

#	Answer	Show me how your brain works. Explain or sketch how you solved the problem.	Understanding
1.			 
2.			 
3.			 
4.			 
5.			 
6.			 
7.			 
8.			 
9.			 

10.			 
11.			 
12.			 
13.			 
14.			 
15.			 
16.			 
17.			 
18.			 
19.			 

20.			 
21.			 
22.			 

Total correct: ____/22

Draw a triangle, pentagon, hexagon, and an octagon. What is the difference between each one?