











Name _____

Date _____ # _____

3rd Grade Math Basic Test 5 - <http://www.prepdog.org/3rd/3mb5.htm>

#	Answer	Show me how your brain works. Explain or sketch how you solved the problem.	Understanding
1.			 
2.			 
3.			 
4.			 
5.			 
6.			 
7.			 
8.			 
9.			 

10.			 
11.			 
12.			 
13.			 
14.			 
15.			 
16.			 
17.			 
18.			 
19.			 

20.			 
21.			 
22.			 
23.			 

Total correct: ____/23

Draw and explain how to find the total perimeter for an object that has the following dimensions: 2", 3", 5", 4", and 6".
 (" is the symbol for inches, but you don't have to draw the object to scale)