















Name _____

Date _____ # _____

2nd Grade Math Basic Test 5- <http://www.prepdog.org/2nd/2mb5.htm>

#	Answer	Show me how your brain works. Explain or sketch how you solved the problem.	Understanding
1.			 
2.			 
3.			 
4.			 
5.			 
6.			 
7.			 
8.			 
9.			 

10.			 
11.			 
12.			 
13.			 
14.			 
15.			 

Total correct: ____/15

Draw a box with six parts and shade or color 1/6 of the box.

