















Name _____

Date _____ # _____

2nd Grade Math Basic Test 3- <http://www.prepdog.org/2nd/2mb3.htm>

#	Answer	Show me how your brain works. Explain or sketch how you solved the problem.	Understanding
1.			 
2.			 
3.			 
4.			 
5.			 
6.			 
7.			 
8.			 
9.			 

10.			 
11.			 
12.			 
13.			 
14.			 
15.			 

Total correct: ____/15

Draw a house with a triangle top (3 sides), and a rectangle bottom (4 sides)?

