









Name _____

Date _____ # _____

5th Grade Math Basic Test 5 - <http://www.prepdog.org/5th/5mb5.htm>

#	Answer	Show me how your brain works. Explain or sketch how you solved the problem.	Understanding
1.			 
2.			 
3.			 
4.			 
5.			 
6.			 
7.			 
8.			 
9.			 

10.			 
11.			 
12.			 
13.			 
14.			 
15.			 
16.			 
17.			 
18.			 
19.			 

20.			 
21.			 
22.			 

Total correct: ____/22

Two tables full of fireman ate pie for dessert. One table ate $6\frac{3}{4}$ pies and the other ate $4\frac{1}{2}$ pies. Draw the total number of pies to show how many pies the fireman ate.