









Name _____

Date _____ # _____

5th Grade Math Basic Test 14 - <http://www.prepdog.org/5th/5mb14.htm>

#	Answer	Show me how your brain works. Explain or sketch how you solved the problem.	Understanding
1.			 
2.			 
3.			 
4.			 
5.			 
6.			 
7.			 
8.			 
9.			 

10.			 
11.			 
12.			 
13.			 
14.			 
15.			 
16.			 
17.			 
18.			 
19.			 

20.			 
21.			 
22.			 

Total correct: ____/22

If a roller coaster ride costs \$5.00, how much does it cost for 4 people ride the roller coaster? Show your work.