










Name _____

Date _____ # _____

5th Grade Math Advanced Test 4 - <http://www.prepdog.org/5th/5ma4.htm>

#	Answer	Show me how your brain works. Explain or sketch how you solved the problem.	Understanding
1.			 
2.			 
3.			 
4.			 
5.			 
6.			 
7.			 
8.			 
9.			 

10.			 
11.			 
12.			 
13.			 
14.			 
15.			 
16.			 
17.			 
18.			 
19.			 

20.			 
21.			 
22.			 
23.			 

Total correct: ____/23

Describe how to find the range, median, meridian, and mode for the following:

6, 5, 2, 3, 4, 4, 7, 5, 2, 5, 9