

















Name \_\_\_\_\_

Date \_\_\_\_\_ # \_\_\_\_\_

4th Grade Math Proficient Test 8 - <http://www.prepdog.org/4th/4mp8.htm>

#	Answer	Show me how your brain works. Explain or sketch how you solved the problem.	Understanding
1.			 
2.			 
3.			 
4.			 
5.			 
6.			 
7.			 
8.			 
9.			 

10.			 
11.			 
12.			 
13.			 
14.			 
15.			 
16.			 

Total correct: \_\_\_\_/16

Lynn earned an 85 on her math test, a 92 on her English test, a 95 on her science test, and a 75 on her history test. What is her average for all her tests? Show your work.

A large empty rectangular box with a black border, intended for the student to show their work for calculating the average score.