



















Name _____

Date _____ # _____

4th Grade Math Proficient Test 1 - <http://www.prepdog.org/4th/4mp1.htm>

#	Answer	Show me how your brain works. Explain or sketch how you solved the problem.	Understanding
1.			 
2.			 
3.			 
4.			 
5.			 
6.			 
7.			 
8.			 
9.			 

10.			 
11.			 
12.			 
13.			 
14.			 
15.			 
16.			 
17.			 

Total correct: ____/17

Write an equation in the form of $a - b = c$ for the following scenario (example $a - 3 = 2$):

Abby has a bag full of oranges. If she pulls 4 oranges out of the bag, and has 3 oranges left, how many oranges did Abby start with in the bag? (You may use a drawing if that helps.)

