

















Name _____

Date _____ # _____

3rd Grade Math Proficient Test 9 - <http://www.prepdog.org/3rd/3mp9.htm>

#	Answer	Show me how your brain works. Explain or sketch how you solved the problem.	Understanding
1.			 
2.			 
3.			 
4.			 
5.			 
6.			 
7.			 
8.			 
9.			 

10.			 
11.			 
12.			 
13.			 
14.			 
15.			 
16.			 
17.			 
18.			 
19.			 

20.			 
21.			 
22.			 
23.			 
24.			 
25.			 
26.			 

Total correct: ____/26

Write a number sentence that will correctly solve the following problem? The children ate 4 slices of a pie. The pie was cut into 12 slices. How many slices were left?