









Name _____

Date _____ # _____

3rd Grade Math Proficient Test 10 - <http://www.prepdog.org/3rd/3mp10.htm>

#	Answer	Show me how your brain works. Explain or sketch how you solved the problem.	Understanding
1.			 
2.			 
3.			 
4.			 
5.			 
6.			 
7.			 
8.			 
9.			 

10.			 
11.			 
12.			 
13.			 
14.			 
15.			 
16.			 
17.			 
18.			 
19.			 

20.			 
21.			 
22.			 

Total correct: ____/22

A hat costs \$20. It is on sale for a 20% discount. How much is the sale price? Write an equation and solve it.